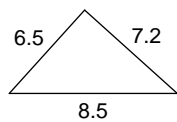


Pythagorean Theorem - Practice

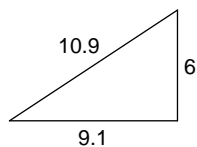
Date _____ Period ____

Do the following lengths form a right triangle?

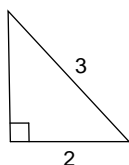
1)



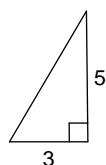
2)

**Find each missing length to the nearest tenth.**

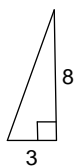
3)



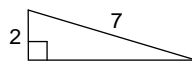
4)



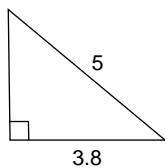
5)



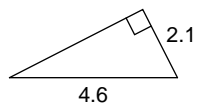
6)



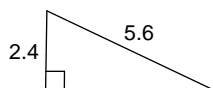
7)



8)



9)



10)

